



Name \_\_\_\_\_

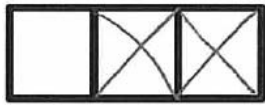
Date \_\_\_\_\_

Here is 8 the 5-group way. Put an X on 2 cubes. How many are left?

Fill in the number sentence and number bond.



If your child crosses the cubes out this way, they can easily see that there are 6 left!



8

-




=



total

X'ed out

total



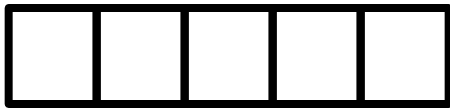
X'ed out



left

Here is 8 the 5-group way. Put an X on 4 cubes. How many are left?

Fill in the number sentence and number bond.

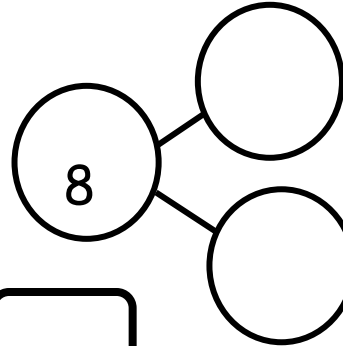


8

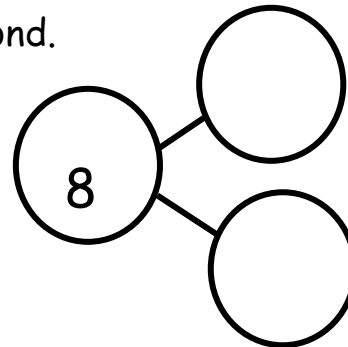
-



=



Draw 8 the 5-group way. Put an X on some cubes. How many are left? Write the number sentence and the number bond.



8

-



=



On another piece of paper, draw 7 the 5-group way. Put an X on some, and write a number sentence and number bond.